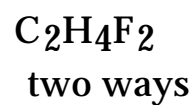
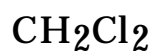
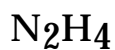
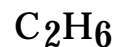


Electron Dot Introduction

Name_____

For each formula below give an electron dot structure which follows the octet rule and uses the right number of electrons.



=====

Double and triple bonds:

